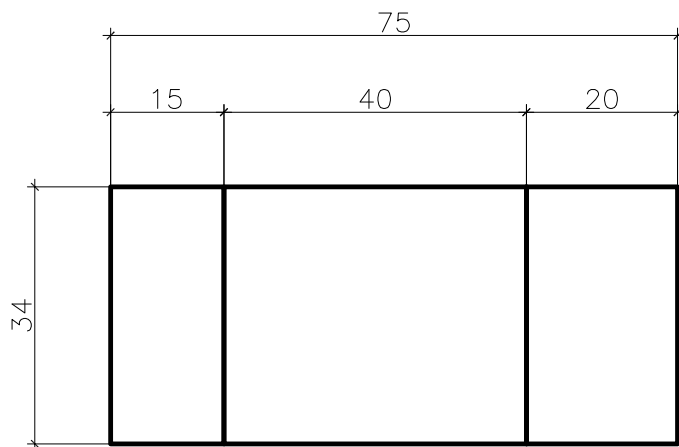
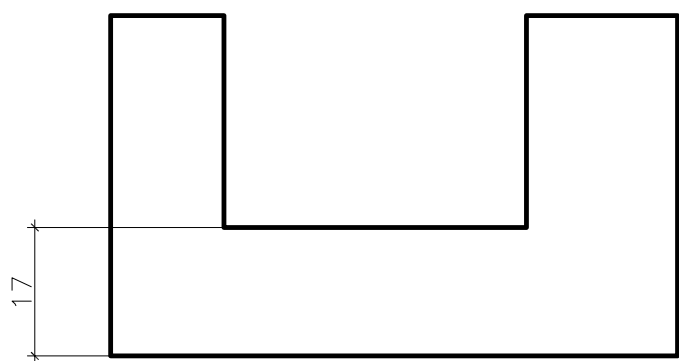
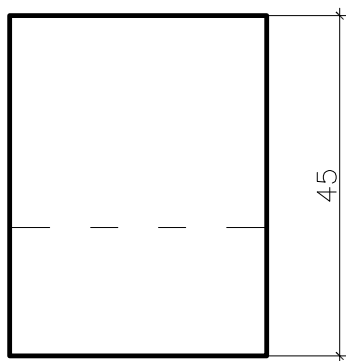
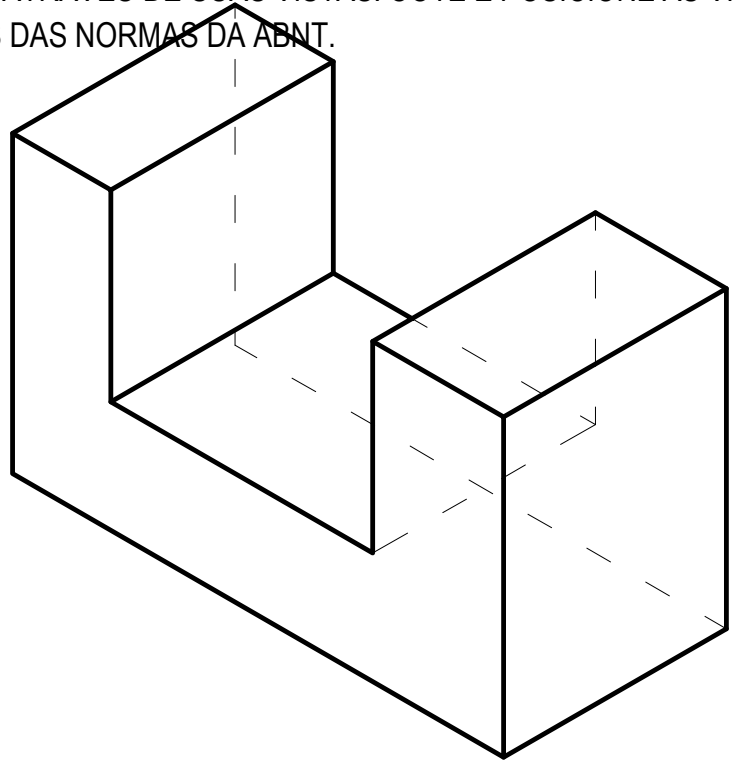


REPRESENTE OS OBJETOS ABAIXO ATRAVÉS DE SUAS VISTAS. COTE E POSICIONE AS VISTAS DE ACORDO COM AS ORIENTAÇÕES DAS NORMAS DA ABNT.

03)



# INSTITUTO FEDERAL SUL-RIOGRANDENSE

DISCIPLINA: <b>DESENHO TÉCNICO</b>	PROFESSORA: <b>PAULA IRIGON</b>	TURMA: <b>TGA/TSA_2019.1</b>
CONTEÚDO: <b>PROJEÇÕES ORTOGONAIS</b>	UNIDADE: <b>mm</b>	PRANCHA: <b>01 C</b>
ALUNO::	DATA: <b>13/03/19</b>	